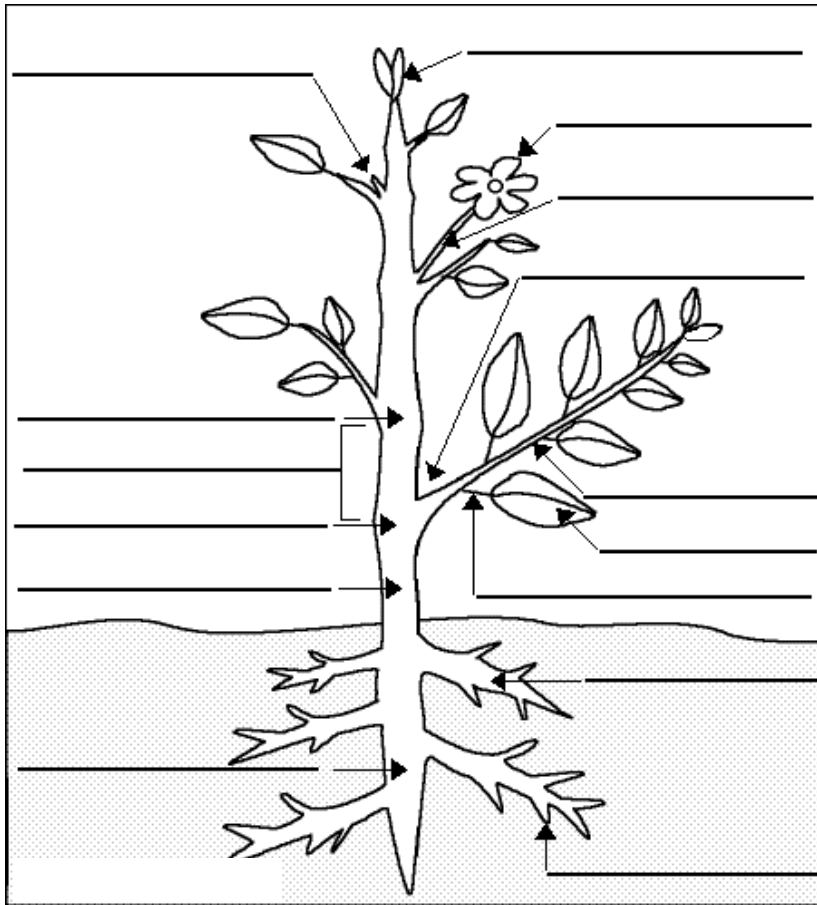


1. Label the various parts of a plant.



Match column A to B.



A

1. It fixes the plant in the soil
2. It carries all the other parts of the shoot
3. It makes food for the plant
4. It grows into a fruit
5. It stores seeds.

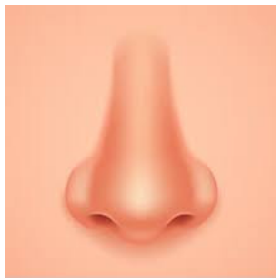


B

- a. Stem
- b. Root
- c. Fruit
- d. Leaf
- e. Flower


Write the name of a given figure of plant.





Label the Sense Organs.



shutterstock.com • 466427093



wikiHow



Draw the figure of given Organs.

Eyes-

Nose-

Ear-

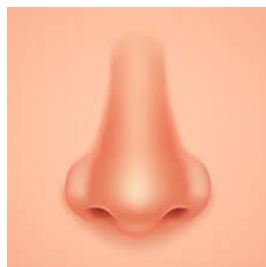
Tongue-

Finer & Skin

Write the function of given Sense Organs.



Eyes-

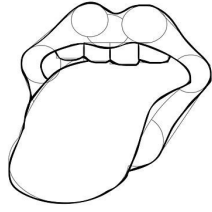


shutterstock.com • 466427093

Nose-




Ear-



wikiflow

Tongue



Finger and Skin

CLASS-3

CHAPTER-1

WORKSHEET-4

Label all the Sense Organs in given figure.

