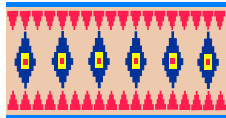
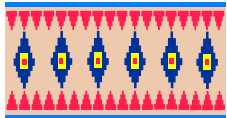


Maths worksheet
Class 1

Q1. Encircle the ones having same length:



Q2. Colour the bigger one:





Q3. Tick the tallest:



Q4. Encircle the heavier one:



Q5. Tick the Longer one:



Q6. Tick the Shortest one:



Q7. Encircle the one with same capacity.

