

MATHS WORKSHEET

CLASS – II

NAME: _____ SECTION : _____ DATE : _____

Write the numbers given below in expanded form

1. H T O

5 7 5 = _____

2. H T O

6 9 2 = _____

3. H T O

1 4 5 = _____

4. H T O

7 8 6 = _____

Q2. a) Encircle all the numbers less than number 75

89	74	61	80	19
----	----	----	----	----

b) Encircle all the numbers greater than number 87

88	82	97	75	60
----	----	----	----	----

c) Colour the circle with the greatest number

34

45

62

21

d) Colour the circle with the smallest number

68

50

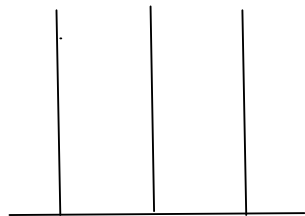
89

91

Q3. Ravi has 35 pencils and Kavi has 15 pencils. How many pencils do they have all together?

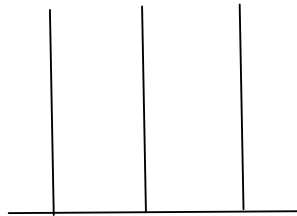
Ans. They have _____pencils all together.

Q4. Draw beads on the abacus to show the number



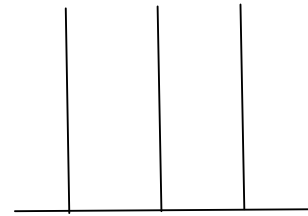
H T O

576



H T O

287



H T O

685

Q5. Write in ascending order

584 482 280 165

Write in descending order

195 245 345 155

Q6. Write the number names.

146 = _____

580 = _____

312 = _____

490 = _____